



NAME _____

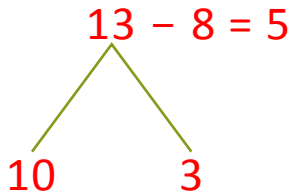
DATE _____

SUBTRACTIONS

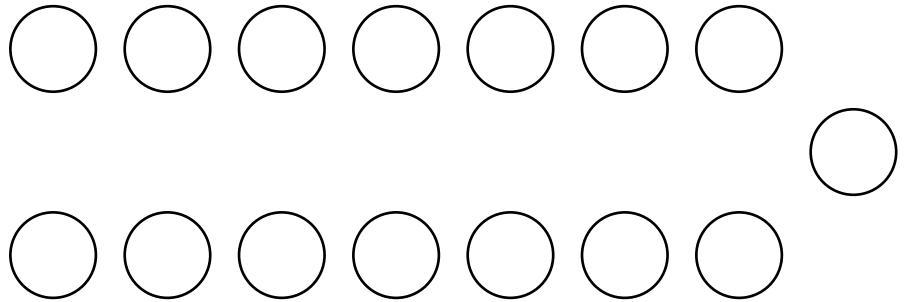
Draw and circle 10. Make a number bond and then subtract.

Example:

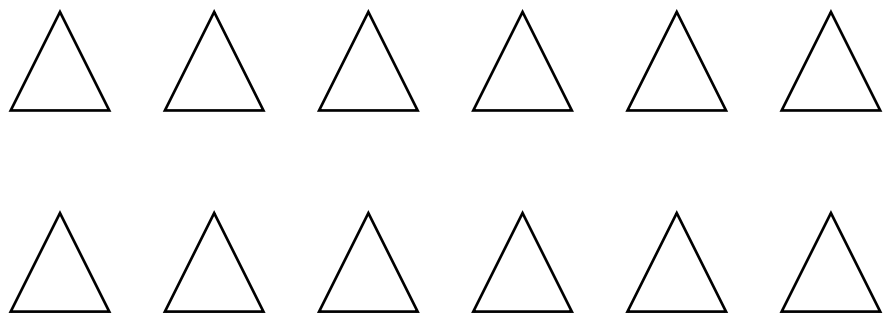
$13 - 8 = \underline{5}$



a) $15 - 8 = \underline{\quad}$



b) $12 - 8 = \underline{\quad}$



c) $14 - 8 = \underline{\quad}$

